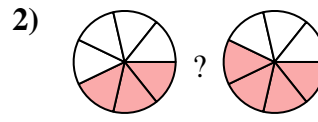
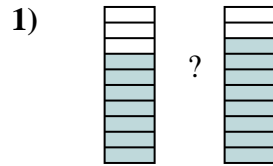
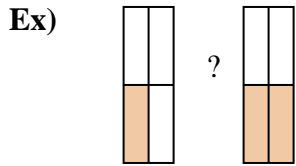




Compare the size of the fractions using  $<$ ,  $>$  or  $=$ .



**Answers**

Ex.  $\frac{1}{4} < \frac{2}{4}$

1. \_\_\_\_\_

2. \_\_\_\_\_

3. \_\_\_\_\_

4. \_\_\_\_\_

5. \_\_\_\_\_

6. \_\_\_\_\_

7. \_\_\_\_\_

8. \_\_\_\_\_

9. \_\_\_\_\_

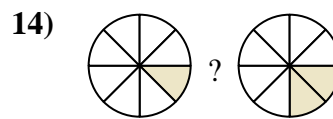
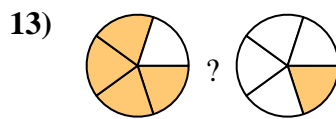
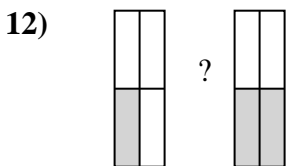
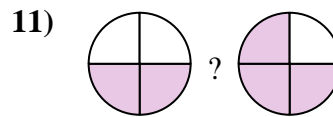
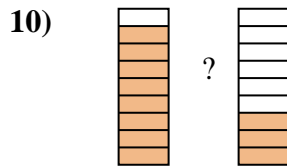
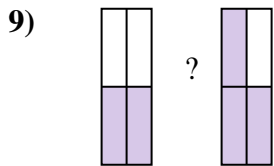
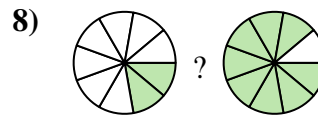
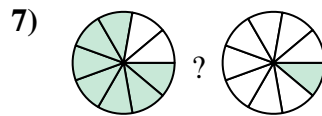
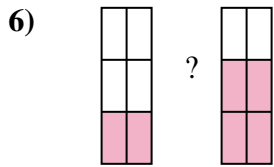
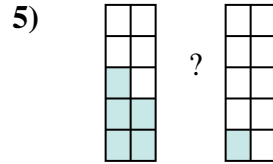
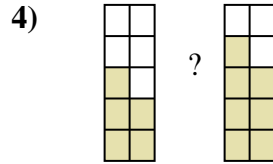
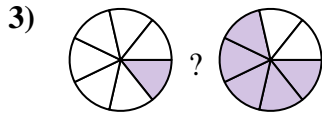
10. \_\_\_\_\_

11. \_\_\_\_\_

12. \_\_\_\_\_

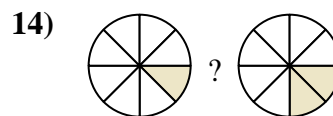
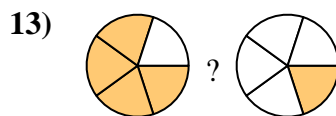
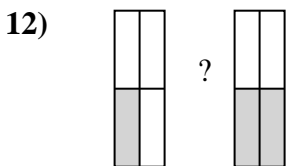
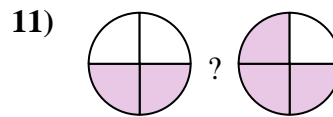
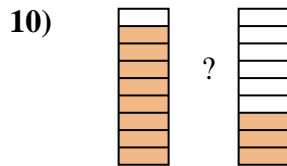
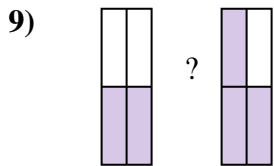
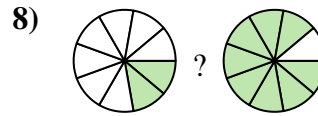
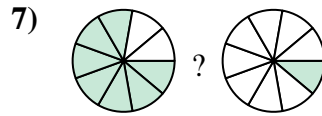
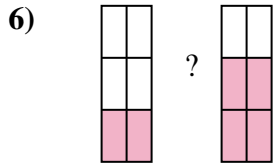
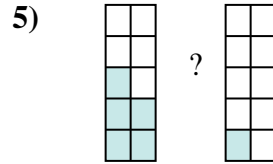
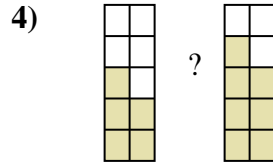
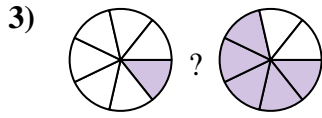
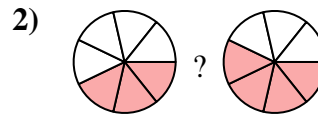
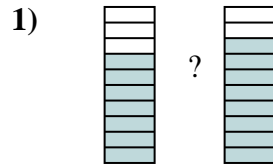
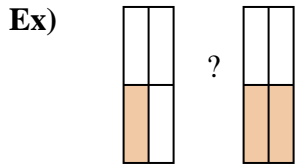
13. \_\_\_\_\_

14. \_\_\_\_\_





Compare the size of the fractions using  $<$ ,  $>$  or  $=$ .



**Answers**

Ex.  $\frac{1}{4} < \frac{2}{4}$

1.  $\frac{7}{10} < \frac{8}{10}$

2.  $\frac{3}{7} < \frac{4}{7}$

3.  $\frac{1}{7} < \frac{5}{7}$

4.  $\frac{5}{10} < \frac{7}{10}$

5.  $\frac{5}{10} > \frac{1}{10}$

6.  $\frac{2}{6} < \frac{4}{6}$

7.  $\frac{7}{9} > \frac{1}{9}$

8.  $\frac{2}{9} < \frac{8}{9}$

9.  $\frac{2}{4} < \frac{3}{4}$

10.  $\frac{8}{9} > \frac{3}{9}$

11.  $\frac{2}{4} < \frac{3}{4}$

12.  $\frac{1}{4} < \frac{2}{4}$

13.  $\frac{4}{5} > \frac{1}{5}$

14.  $\frac{1}{8} < \frac{2}{8}$